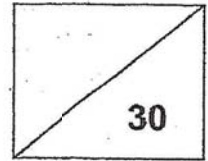




Maha Bodhi School
2020 Weighted Assessment 2
Mathematics Review 2
Primary 4



Name: _____ ()

Class: Primary 4 _____

Duration: 40 minutes

Date: 25 August 2020

Parent's Signature: _____

Section A (10 marks)

Questions 1 to 5 carry 2 marks each.

For each question, four options are given. One of them is the correct answer.

Make your choice (1, 2, 3 or 4) and write your choice in the bracket () provided.

1. How many fifths are there in $1\frac{3}{5}$?

(1) 8

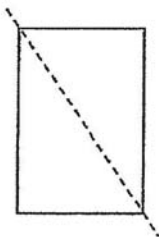
(2) 9

(3) 3

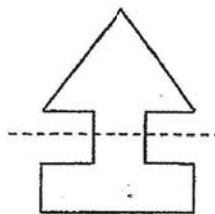
(4) 4

()

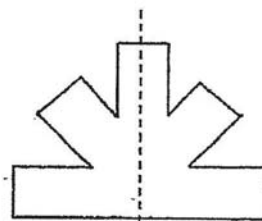
2. Which of the following dotted lines is a line of symmetry of the figure?



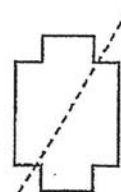
(1)



(2)



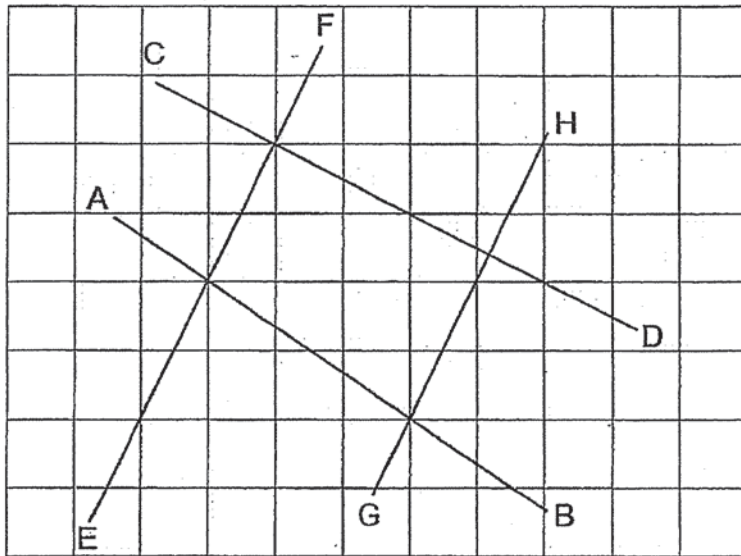
(3)



(4)

()

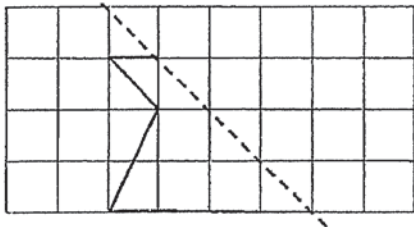
3. Which two lines are parallel to each other?



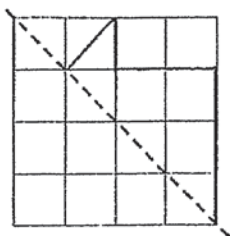
- (1) AB and GH
- (2) AB and CD
- (3) CD and EF
- (4) EF and GH

()

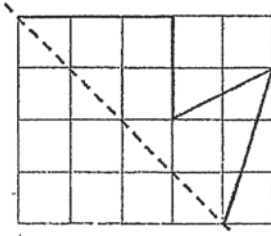
4. Look at the figure below.



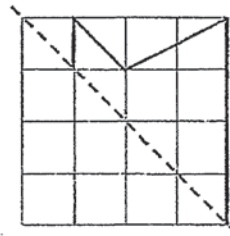
Which of the following completes the symmetric figure above?



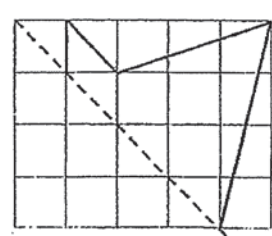
(1)



(2)



(3)



(4)

()

5. After Sam spent $\frac{3}{4}$ of his salary and gave \$300 to his parents, he had \$200 left.

How much was Sam's salary?

- (1) \$500
- (2) \$600
- (3) \$1500
- (4) \$2000

()

Section B (12 marks)

Questions 6 to 11 carry 2 marks each.

Show your working clearly and write your answers in the spaces provided.

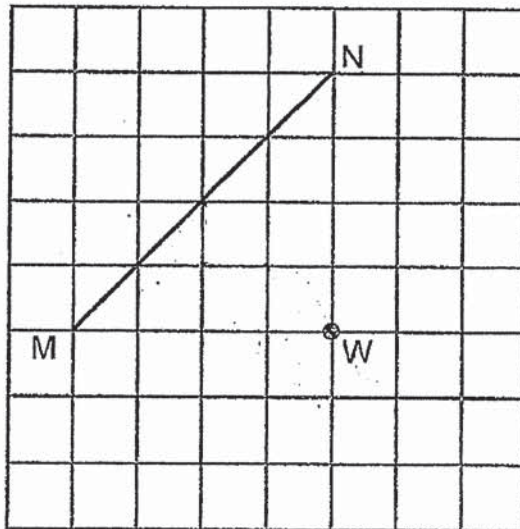
For questions which require units, give your answers in the units stated.

6. $\frac{6}{7} = \frac{48}{\boxed{?}}$

What is the missing number in the box?

Ans: _____

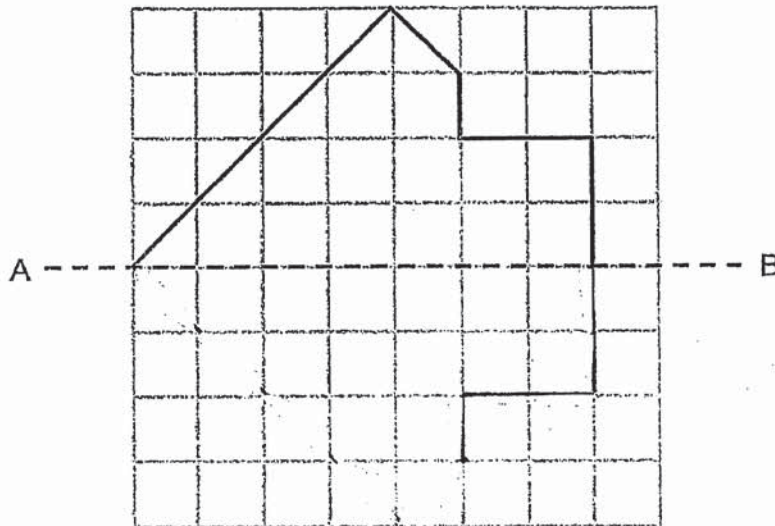
7. Draw a line perpendicular to MN, passing through point W.



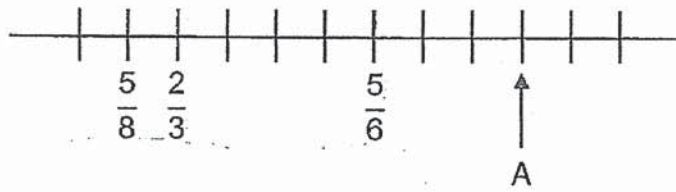
8. The length of a rope is twice the length of a ribbon.
The length of the ribbon is $\frac{3}{7}$ m. Find the total length of the rope and the ribbon.
Give your answer as a mixed number in the simplest form.

Ans: _____ m

9. The grid shows half of a symmetric figure with AB as the line of symmetry.
Draw the other half of the symmetric figure.



10. In the number line shown below, what fraction does the letter A stand for?



Ans: _____

11. Mary had 65 eggs at first. She used 20 eggs to bake cakes and gave away some eggs. In the end, she was left with $\frac{1}{5}$ of the eggs she had at first. How many eggs did Mary give away?

Ans: _____ eggs

Section C (8 marks)

Questions 12 and 13 carry 4 marks each.

Show your working clearly and write your answers in the spaces provided. The number of marks available is shown in brackets [] at the end of each question or part-question.

12. The total mass of a packet of rice and a packet of flour is $\frac{7}{8}$ kg.

The mass of the packet of rice is $\frac{1}{2}$ kg.

Find the difference between the mass of the packet of rice and mass of the packet of flour.

Ans: _____ [4]

13. There are 570 people at a concert. $\frac{1}{6}$ of them are children.

There are 36 boys. How many girls are there at the concert?

Ans: _____ [4]

14



Remember to check your work!

~ End of Paper ~

This is the property of Maha Bodhi School.
No part of this should be duplicated without the permission of Maha Bodhi School.

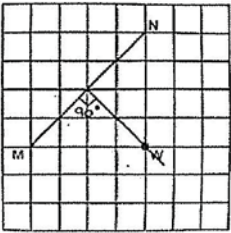
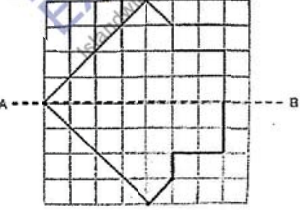
ANSWER KEY

YEAR : 2020
LEVEL : PRIMARY 4
SCHOOL : MAHABODHI SCHOOL
SUBJECT : MATHEMATICS
TERM : SA1

SECTION A

Q1	1	Q2	3	Q3	4	Q4	3	Q5	4
----	---	----	---	----	---	----	---	----	---

SECTION B

Q6	56
Q7	
Q8	$\frac{3}{7} \times 2 = \frac{6}{7}$ $\frac{6}{7} + \frac{3}{7} = \frac{9}{7}$ $= 1\frac{2}{7}m$
Q9	
Q10	$\frac{23}{24}$

Q11	$65 \div 5 = 13$ $65 - 20 = 45$ $45 - 13 = 32$ eggs
Q12	$\frac{7}{8} - \frac{1}{2} = \frac{7}{8} - \frac{4}{8} = \frac{3}{8}$ The mass of the flour is $\frac{3}{8}$ kg $\frac{1}{2} - \frac{3}{8} = \frac{4}{8} - \frac{3}{8}$ The difference is $\frac{1}{8}$ kg
Q13	$570 \div 6 = 95$ $95 - 36 = 59$ There are 59 girls at the concert.

2
2/8