


Name: _____ ()

Class: Primary 3 _____

CHIJ ST NICHOLAS GIRLS' SCHOOL (PRIMARY)



Primary 3 Mathematics

2020 Termly Assessment

14 July 2020

Total:	/45
--------	-----

 Parent's/Guardian's Signature

20 questions
45 marks

Total Time: 1 hour

INSTRUCTIONS TO CANDIDATES

Do not turn over this page until you are told to do so.
Follow all instructions carefully.
Answer all questions.
Write your answers in this booklet.

This booklet consists of 12 printed pages.

Section A

Questions 1 to 8 carry 2 marks each. For each question, four options are given. One of them is the correct answer. Make your choice (1, 2, 3 or 4). Write your answer in the brackets provided.

(16 marks)

1. What is five thousand, two hundred and three written in numerals?

(1) 5230

(2) 5203

(3) 5023

(4) 523

()

2. What is the sum of 201 and 6050?

(1) 8060

(2) 6251

(3) 5849

(4) 4040

()

3. Which of the following has the same value as 4×6 ?

(1) $4 \times 4 \times 4 \times 4 \times 4 \times 4$

(2) $4 + 4 + 4 + 4$

(3) $6 \times 6 \times 6 \times 6$

(4) $6 + 6 + 6 + 6$

()

4. $380 \times 5 =$ _____

(1) 1500

(2) 1505

(3) 1900

(4) 1905

()

5. What is the remainder when 52 is divided by 8?

(1) 60

(2) 44

(3) 6

(4) 4

()

MARKS:

--

6. Sandra paid \$10.90 for a box of tarts and \$3.25 for a packet of sweets.
How much did she spend altogether?

(1) \$14.15

(2) \$13.15

(3) \$7.75

(4) \$7.65

()

7. Find the difference between the values of the digit 2 in 4235 and 5142.

(1) 907

(2) 202

(3) 198

(4) 180

()

8. There were 170 adults at a fun fair.
There were 89 more children than adults at the fun fair.
How many people were at the fun fair altogether?

(1) 429

(2) 259

(3) 251

(4) 81

()

Section B

Questions 9 to 17 carry 2 marks each. Show your working clearly and write your answers in the spaces provided. For questions which require units, give your answers in the units stated. (18 marks)

Do not write
in this space

9. What is 100 less than 3083?

Ans: _____

10. What are the missing numbers?

(a) $\boxed{?} \div 9 = 5$

(b) $\boxed{?} \times 6 = 36$

Ans: (a) _____

(b) _____

5

MARKS:

--

Do not write
in this space

11. A pair of shoes costs \$35.70.
A school bag costs \$59.45.
How much more does the school bag cost than the pair of shoes?

Ans: \$ _____

12. A number when divided by 9 gives a quotient of 8 and a remainder of 2.
What is this number?

Ans: _____

13. Study the number pattern.
What are the missing numbers?

1300 , 1200 , 1400 , 1300 , 1500 , 1400 , 1600 , _____ , _____

Ans: _____

6

MARKS:

14. Ben collected 9 stamps.
Leslie collected 6 times as many stamps as Ben.
How many stamps did they collect altogether?

Do not write
in this space

Ans: _____

15. Jessie gave some cards to her 27 classmates.
Each classmate received 3 cards.
She then had 18 cards left.
How many cards did she have at first?

Ans: _____

7

MARKS:

--

16. Kamil put 75 fruits into some boxes.
He put 7 fruits into 1 box.
What was the smallest number of boxes he needed to put all the fruits?

Do not write
in this space

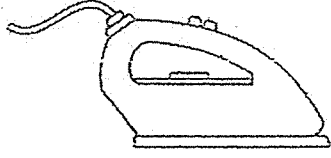
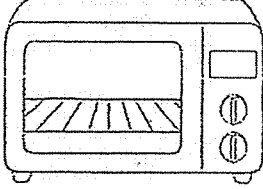

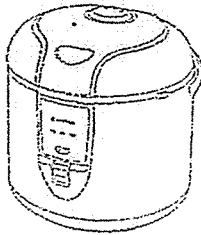
Ans: _____

8

MARKS:

17. Look at the items below.

Do not write
in this space

<p style="text-align: center;">Iron</p>  <p style="text-align: center;">\$140</p>	<p style="text-align: center;">Oven</p>  <p style="text-align: center;">\$320</p>
<p style="text-align: center;">Vacuum Cleaner</p>  <p style="text-align: center;">\$260</p>	<p style="text-align: center;">Rice Cooker</p>  <p style="text-align: center;">\$280</p>

Anita bought two items.

She gave the cashier a \$1000 note and received a change of \$580.

Which two items did she buy?

Ans: _____ and _____

9

MARKS:

Section C

Question 18 carries 3 marks. Questions 19 and 20 carry 4 marks each. Show your working clearly and write your answers in the spaces provided. For questions which require units, give your answers in the units stated. The number of marks available is shown in brackets [] at the end of each question or part-question.

Do not write
in this space

(11 marks)

18. Mr Goh had 852 books.
He sold 243 books.
Then he packed the remaining books equally into some boxes.
There were 7 books in a box.
How many boxes did he use to pack all the books?

Ans: _____ [3]

19. A doll costs \$30.

It costs 5 times as much as a toy truck.

(a) How much does a toy truck cost?

(b) Jasmine bought 17 similar toy trucks. How much did she pay for the toy trucks altogether?

Do not write
in this space

Ans: (a) _____ [2]

(b) _____ [2]

MARKS:

20. Ali and Betsy collected 128 cards altogether.
Betsy gave 24 cards to Ali.
In the end, Betsy had three times as many cards as Ali.
How many cards did Ali have at first?

Do not write
in this space

Ans: _____ [4]

12

MARKS:

YEAR : 2020
 LEVEL : PRIMARY 3
 SCHOOL : CHIJ ST NICHOLAS GIRLS' SCHOOL
 SUBJECT : MATH
 TERM : TERM 1 ASSESSMENT

Q1	2	Q2	2	Q3	4	Q4	3	Q5	4
Q6	1	Q7	3	Q8	1				

Q9	2983
Q10	(a)45 (b)6
Q11	$59.45 - 35.70 = \$23.75$
Q12	$8 \times 9 = 72$ $72 + 2 = 74$
Q13	1500, 1700
Q14	$9 \times 6 = 54$ $54 + 9 = 63$
Q15	$27 \times 3 = 81$ $81 + 18 = 99$
Q16.	$75 \div 5 = 10R5$ $10 + 1 = 11$
Q17	$1000 - 580 = 420$ $280 + 140 = 420$ Iron and Rice cooker
Q18	$852 - 243 = 609$ $609 \div 7 = 87$ He used 87 boxes to pack all the books
Q19	(a)A toy truck cost \$6 (b)She payed \$102 for the toy trucks altogether..
Q20	$128 \div 4 = 32$ $32 - 24 = 8$ Ali had 8 cards at first