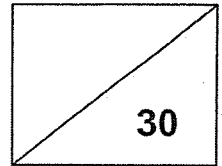


Maha Bodhi School
2020 Weighted Assessment 2
Mathematics Review 2
Primary 3



Name: _____ ()

Class: Primary 3 _____

Duration: 40 minutes

Date: 25 August 2020

Parent's Signature: _____

Section A (10 marks)

Questions 1 to 5 carry 2 marks each.

For each question, four options are given. One of them is the correct answer.

Make your choice (1, 2, 3 or 4) and write your choice in the bracket () provided.

1. In 5483, what is the value of the digit 5?


(1) 5

(2) 50

(3) 500

(4) 5000

()



2. What is the amount of money shown below?



- (1) \$14.30
- (2) \$19.30
- (3) \$20.30
- (4) -\$21.30

()

3. The picture graph shows the number of coloured balls in a storeroom.

	Number of balls
Red	
Blue	
Green	
Yellow	
Each represents 3 balls.	

How many yellow balls are there in the storeroom?

- (1) 14
- (2) 12
- (3) 9
- (4) 4

()

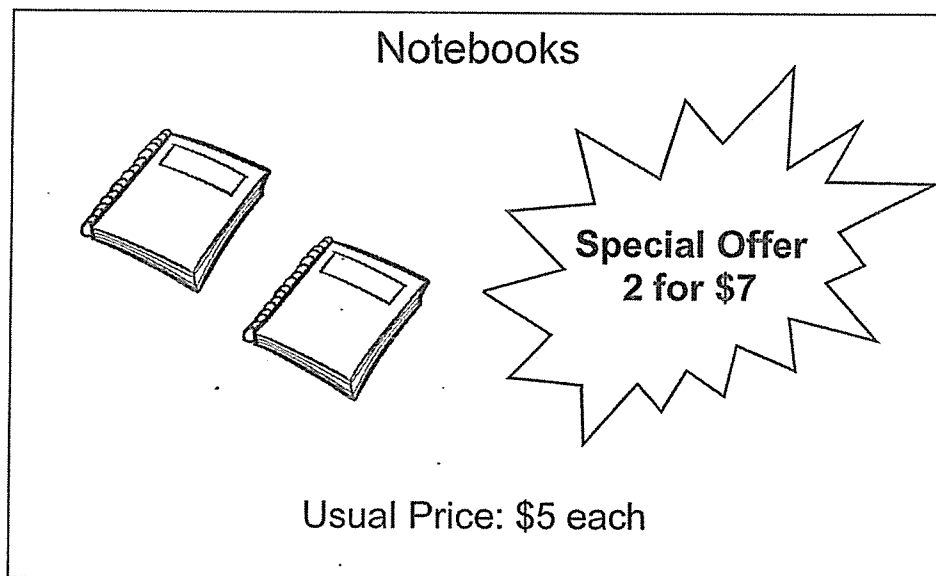
4. What is the missing number in the box?

$$7 \times 6 = \boxed{?} + 6$$

- (1) 7
- (2) 36
- (3) 42
- (4) 48

()

5. The diagram below shows a special offer for notebooks.



Sam bought 2 notebooks at the special offer.

How much **more** money would he have to pay for the 2 notebooks when there was no special offer?

- (1) \$5
- (2) \$2
- (3) \$3
- (4) \$4

()

Section B (10 marks)

Questions 6 to 10 carry 2 marks each.

Show your working clearly and write your answers in the spaces provided.

For questions which require units, give your answers in the units stated.

6. What is the missing number in the pattern below?

250, 280, 310, 340, _____.

Ans: _____

7. Alex bought a watch and a hat.

How much did he pay for the two items?



Watch
\$29.80

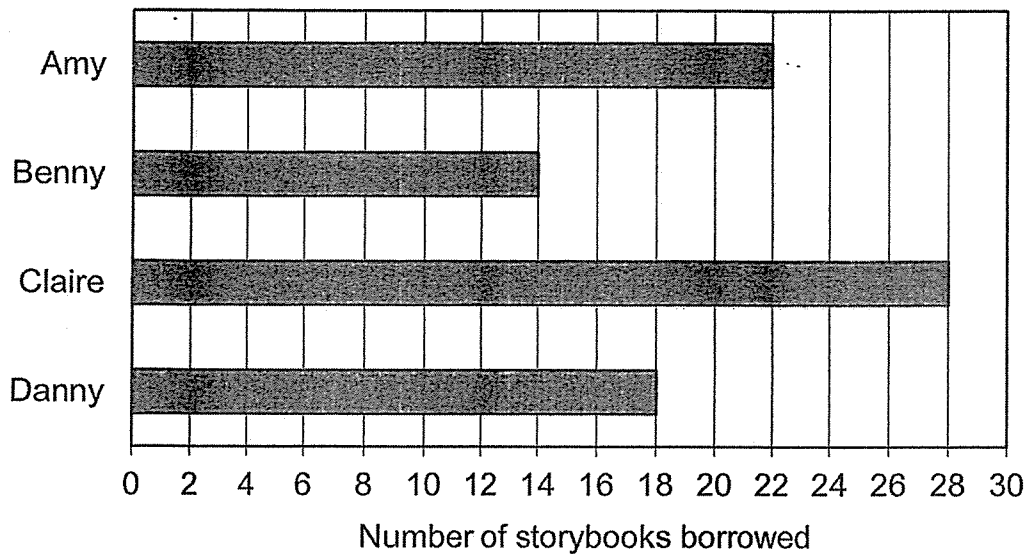


Hat
\$15.65

Ans: \$ _____

14

8. The bar graph shows the number of storybooks borrowed by 4 children in the month of June. How many storybooks did Benny borrow?



Ans: _____ storybooks

9. Mark has 860 stamps. Natalie has 142 fewer stamps than Mark. Oscar has 250 more stamps than Natalie. How many stamps does Oscar have?

Ans: _____ stamps

10. A file costs \$5.30. A correction tape costs \$2.80 less than the file. How much do two correction tapes cost?

Ans: \$ _____

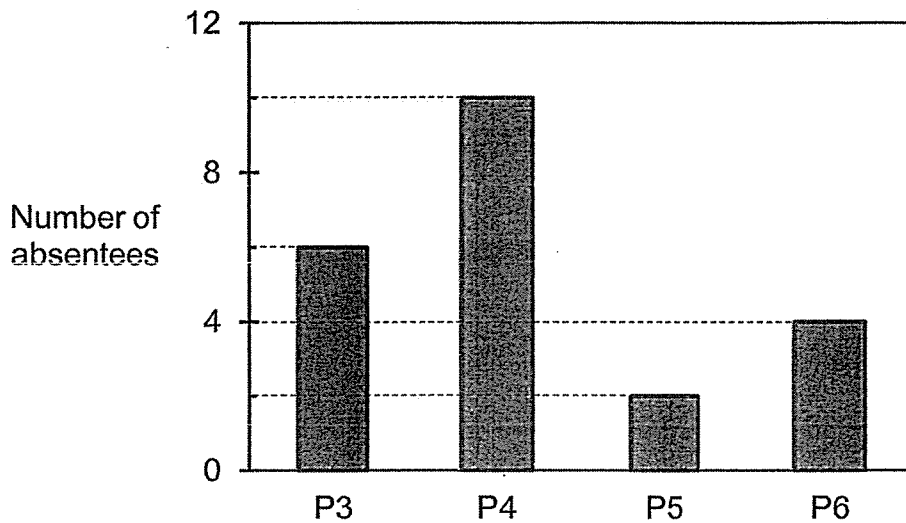
Section C (10 marks)

Questions 11 and 12 carry 3 marks each

Question 13 carries 4 marks.

Show your working clearly and write your answers in the spaces provided. The number of marks available is shown in brackets [] at the end of each question or part-question.

11. The bar graph shows the number of pupils in Primary 3 to Primary 6 who were absent from school on a particular day.



- (a) How many more P4 pupils than P5 pupils were absent on that day?
- (b) The total number of P3 pupils was 312.
How many P3 pupils were present in school that day?

Ans: (a) _____ [1]

(b) _____ [2]


/ 3

12. Mrs Pang had 8 boxes of apples.
Each box contained 24 apples.
She then packed the apples into bags of 5 apples each.
How many bags of apples could she pack at most?

Ans: _____ [3]

/ 3

13. The diagram below shows the items sold at a furniture shop.
The desk costs \$78 more than the bookshelf.



- (a) How much does the bookshelf cost?
- (b) Mr Ang bought the desk and paid the cashier with two 100-dollar notes.
How much change would he get?

Ans: (a) _____ [2]

(b) _____ [2]

/ 4



Remember to check your work!

~ End of Paper ~

Name: _____ () Class: _____

Example 1:

Mrs Pang had 8 boxes of apples.

Each box contained 24 apples.

She then packed the apples into bags of 5 apples each.

How many bags of 5 apples each could she pack at most?

Answer: _____

Example 2:

Mrs Pang had 8 boxes of apples.

Each box contained 24 apples.

She then packed all the apples into bags.

Each bag can hold 5 apples at most.

What is the least number of bags she will need to pack all the apples?

Answer: _____

SCHOOL : MAHA BODHI SCHOOL

LEVEL : PRIMARY 3

SUBJECT : MATH

TERM : 2020 CA2

SECTION A

Q1	Q2	Q3	Q4	Q5
4	3	2	2	3

SECTION B

Q6	370
Q7	\$45.45
Q8	14
Q9	968 STAMPS
Q10	\$5.00

SECTION C

Q11	(a) $10 \times 2 = 8$ (b) $312 \div 6 = 306$
Q12	$24 \times 8 = 192$ $192 \div 5 = 38R2$
Q13	(a) $163 - 78 = 85$ (b) $200 - 163 = 37$

EXAMPLE 1: 38 BAGS

EXAMPLE 2: 39 BAGS