

Nan Hua Primary School
Primary 3 Mathematics
Term 1 Weighted Assessment 2020

Name: _____ ()

Class: Primary 3/ _____

Date: _____

Marks	
Section A:	/14
Section B:	/6
Total:	/20

Parent's Signature

Answer all questions.

Section A Part 1 (8 marks)

Questions 1 to 8 carry 1-mark each. For each question, four options are given.

One of them is the correct answer. Make your choice (1, 2, 3 or 4) and write your answer in the bracket provided.

1. Write eight thousand, nine hundred and six in numerals.

- (1) 8096
- (2) 8900
- (3) 8906
- (4) 8960

()

2. What does the digit 4 in 5842 stand for?

- (1) 4000
- (2) 400
- (3) 40
- (4) 4

()


Score	2
-------	---

3. In 5976, which digit is in the hundreds place?

- (1) 5
- (2) 6
- (3) 7
- (4) 9

()

4. What is the number shown below?



- (1) 6035
- (2) 6053
- (3) 6503
- (4) 6530

()

Score	
-------	--

5. Arrange the following numbers from the greatest to the smallest

4671

6174

4617

(1) 4671, 4617, 6174

(2) 4617, 4671, 6174

(3) 6174, 4617, 4671

(4) 6174, 4671, 4617

()

6. Which one of the following numbers is the greatest?

(1) 3561

(2) 3515

(3) 3750

(4) 3718

()

7. Find the sum of 4207 and 1768.

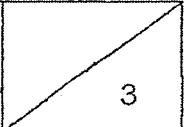
(1) 2439

(2) 2449

(3) 5965

(4) 5975

()

Score	
-------	---

8. The sum of two numbers is 5073.
The smaller number is 1849.
What is the greater number?

- (1) 3224
(2) 3236
(3) 4824
(4) 4836

()

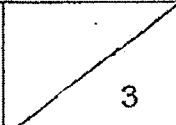
Section A Part 2 (6 marks)

Questions 9 to 11 carry 2 marks each. Write your answers in the spaces provided.
For questions which require units, give your answers in the units stated.

9. Find the value of the following questions:

(a) $5896 - 2435$

(b) $4956 + 2587$

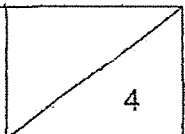
Score	
-------	---

10. Look at the number pattern below. What is the missing number?

(a) 8428, 8328, 8228, 8128, 8028, _____, 7828

(b) 5069, 5079, 5089, 5099, _____, 5119, 5129

11. 3679 people were at a funfair.
2496 of them were adults and the rest were children.
How many children were at the funfair?

Score	
-------	---

Section B (6 marks)

Questions 12 and 13 carry 3 marks each. Show your working clearly and write your answers in the spaces provided. For questions which require units, give your answers in the units stated.

12. Mrs Chen had \$6000.

She paid \$4058 for the sofa and the television.

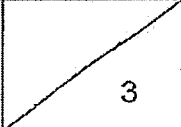
(a) How much money did Mrs Chen have left? [1 mark]

(b) The sofa cost \$2259.

How much did the television cost? [2 marks]

Ans: (a) _____

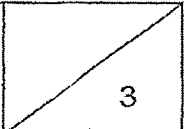
(b) _____

Score	
-------	---

13. Alice has 1465 stickers.
She has 670 more stickers than Bala.
How many stickers do they have altogether? [3 marks]

Ans: _____

End of Paper

Score	
-------	---

ANSWER KEY

YEAR: 2020

LEVEL: PRIMARY 3

SCHOOL: NAN HUA PRIMARY SCHOOL

SUBJECT: MATHEMATICS

TERM: CA1

BOOKLET A

Q1	3	Q2	3	Q3	4	Q4	2	Q5	4
Q6	3	Q7	4	Q8	1				

BOOKLET B

Q9	a) 3461 b) 7543
Q10	a) 7928 b) 5109
Q11	1183
Q12	a) $6000 - 4058 = 1942$ b) $\$4058 - 2259 = \1799
Q13	$1465 - 670 = 793$ $1465 + 795 = 2260$